

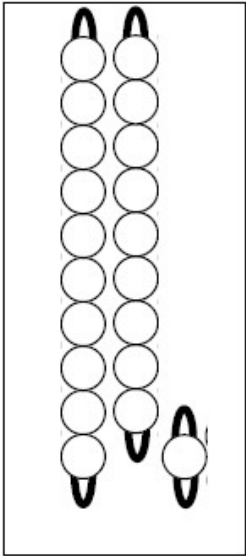
Prénom :

Date :

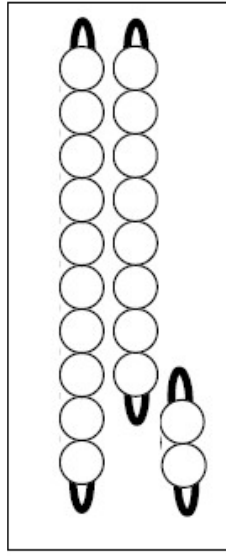
**Les compléments à 10 :  
mémorisation**

Calcul

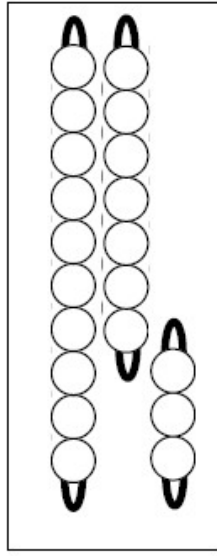
**1. Recherche :** colorie les perles pour faire 10 et écris les égalités :



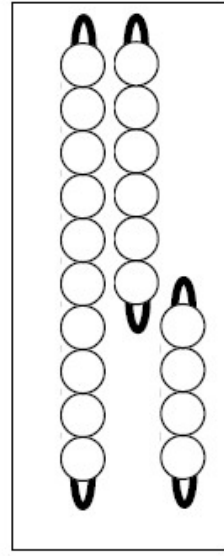
$10 = \dots + \dots$



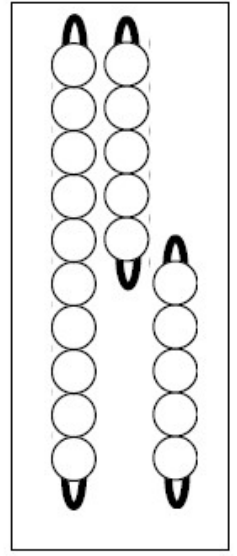
$10 = \dots + \dots$



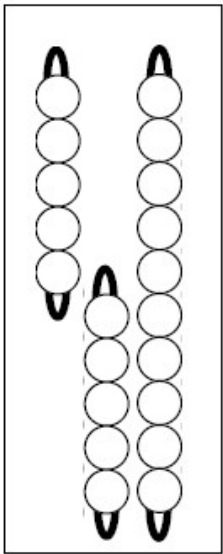
$10 = \dots + \dots$



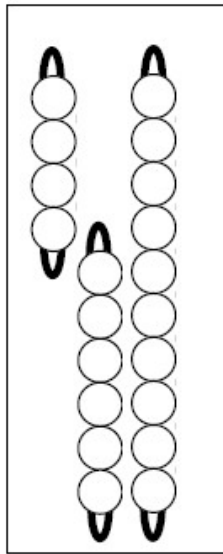
$10 = \dots + \dots$



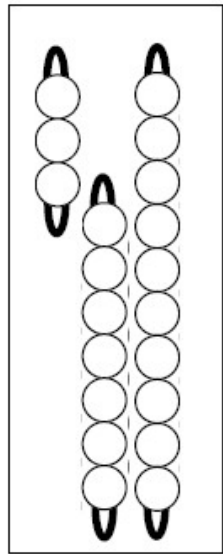
$10 = \dots + \dots$



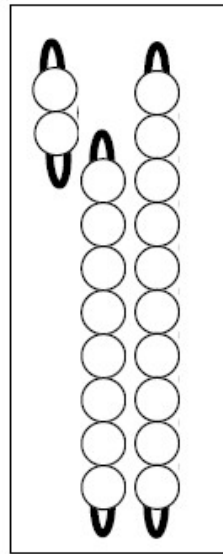
$10 = \dots + \dots$



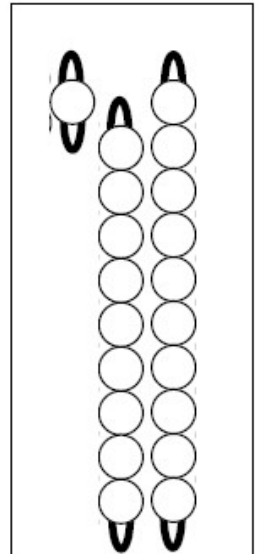
$10 = \dots + \dots$



$10 = \dots + \dots$



$10 = \dots + \dots$




$10 = \dots + \dots$


**2. Colorie** ce qui fait 10 :

8 + 2	6 + 1	3 + 2	5 + 5	4 + 6	1 + 2	9 + 1	10 + 0
5 + 2	4 + 6	9 + 1	8 + 1	7 + 3	9 + 1	6 + 4	7 + 2

3. **Colorie** de la même couleur les poissons qui font 10 :



4. **Colorie** de la même couleur les poissons qui font 10 :



5. **Complète** :

$6 + \dots = 10$

$\dots + 9 = 10$

$5 + \dots = 10$

$3 + \dots = 10$

$\dots + 8 = 10$

$\dots + 0 = 10$

$\dots + 2 = 10$

$1 + \dots = 10$

$4 + \dots = 10$

$10 + \dots = 10$

$\dots + 5 = 10$

$\dots + 7 = 10$

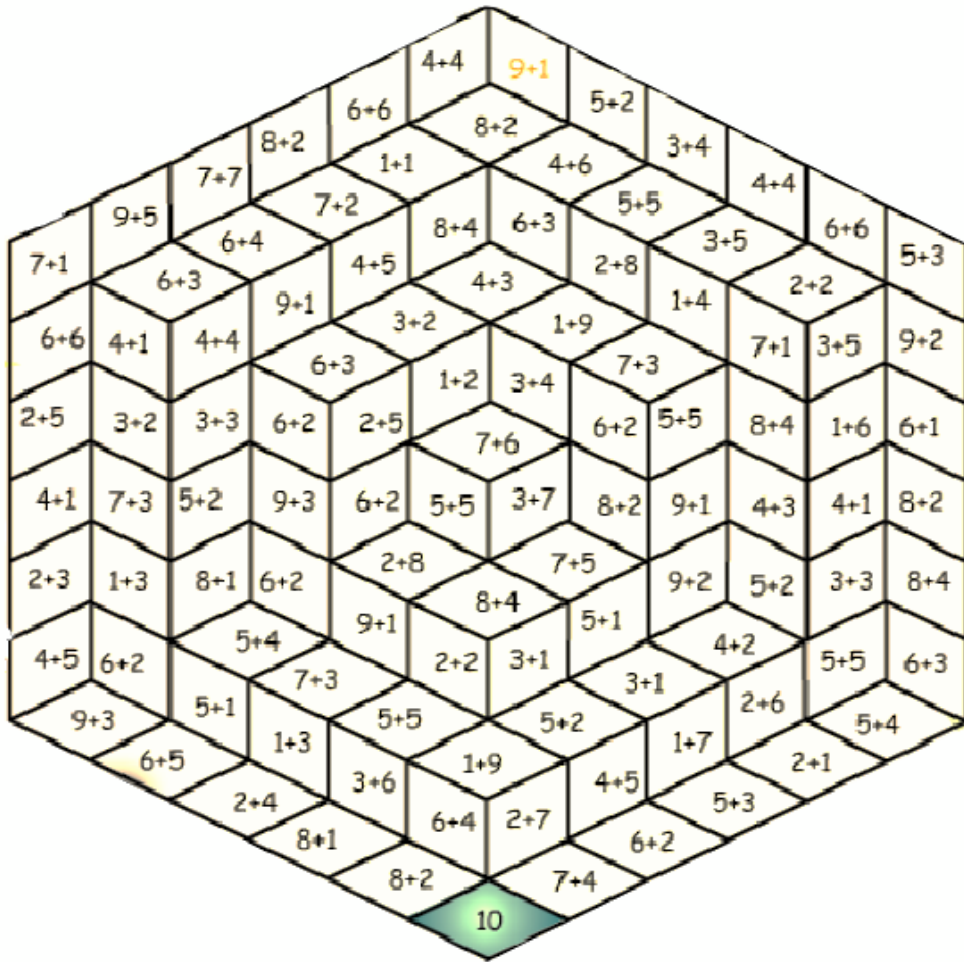
Prénom :

Date :

## Les compléments à 10: entraînement

Calcul

1. **Trouve** le chemin en coloriant ce qui fait 10.



2. **Entoure** de la même couleur ce qui fait 10 :

