

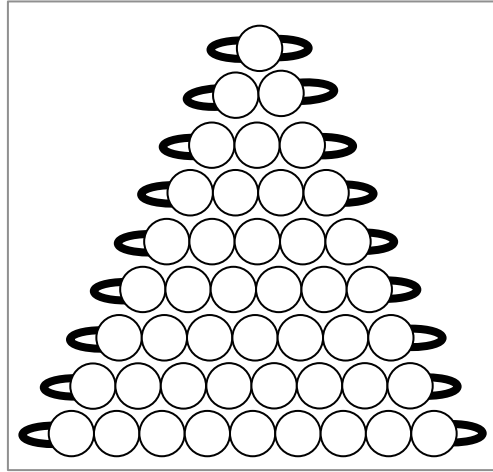
Prénom :


Date :










Les perles colorées 1










Numération










1.  **Colorie** de la bonne couleur.












2.  **Ecris** le nombre de perles et  **colorie**.

	<input type="text"/>
	<input type="text"/>
	<input type="text"/>
	<input type="text"/>
	<input type="text"/>
	<input type="text"/>
	<input type="text"/>
	<input type="text"/>
	<input type="text"/>

	<input type="text"/>
	<input type="text"/>
	<input type="text"/>
	<input type="text"/>
	<input type="text"/>
	<input type="text"/>
	<input type="text"/>
	<input type="text"/>
	<input type="text"/>

	<input type="text"/>
	<input type="text"/>
	<input type="text"/>
	<input type="text"/>
	<input type="text"/>
	<input type="text"/>
	<input type="text"/>
	<input type="text"/>
	<input type="text"/>

	<input type="text"/>
	<input type="text"/>
	<input type="text"/>
	<input type="text"/>
	<input type="text"/>
	<input type="text"/>
	<input type="text"/>
	<input type="text"/>
	<input type="text"/>


Prénom :


Date :










Les perles colorées 2










Numération










1.  **Colle** les perles dans l'ordre.









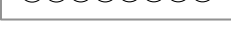


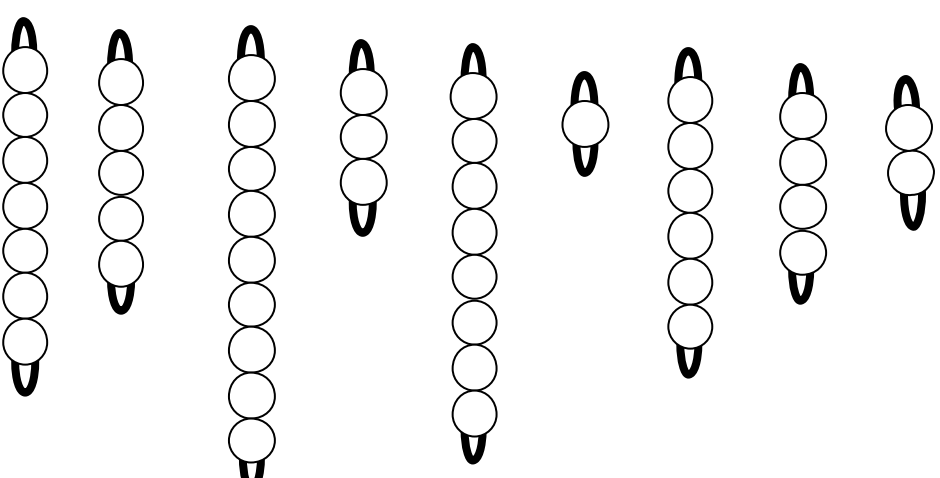
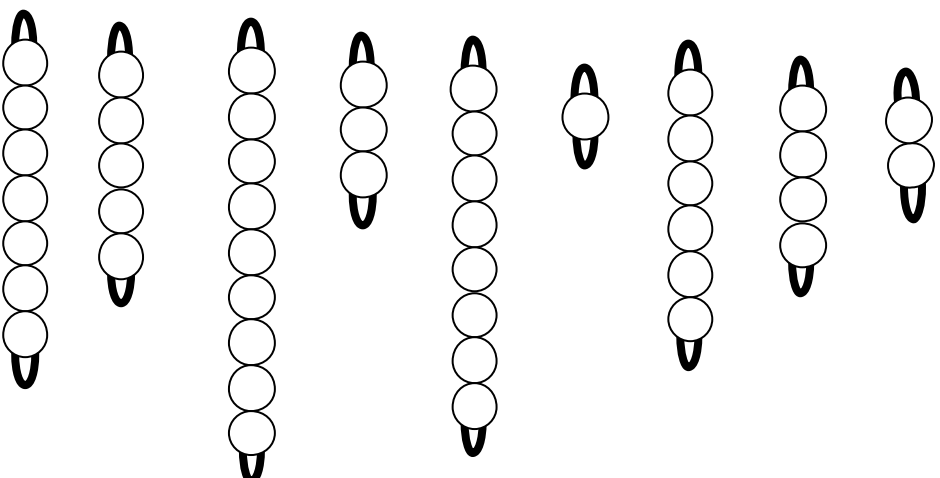
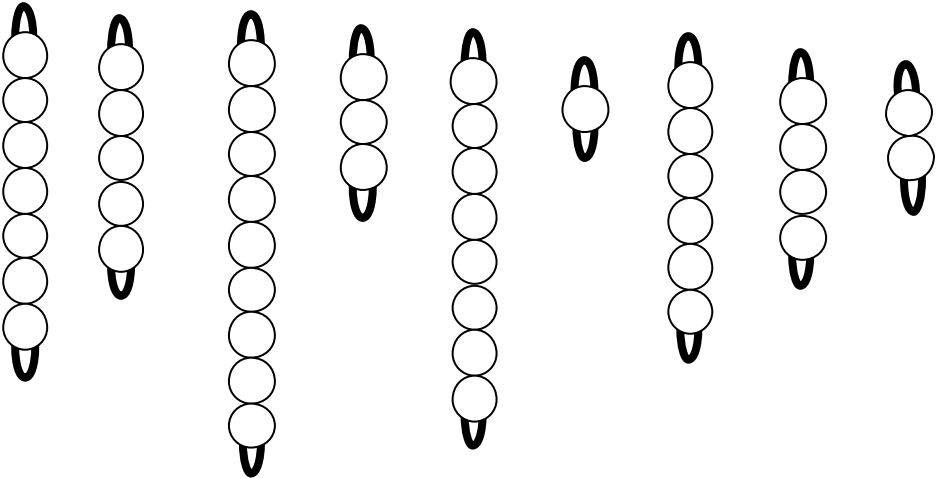
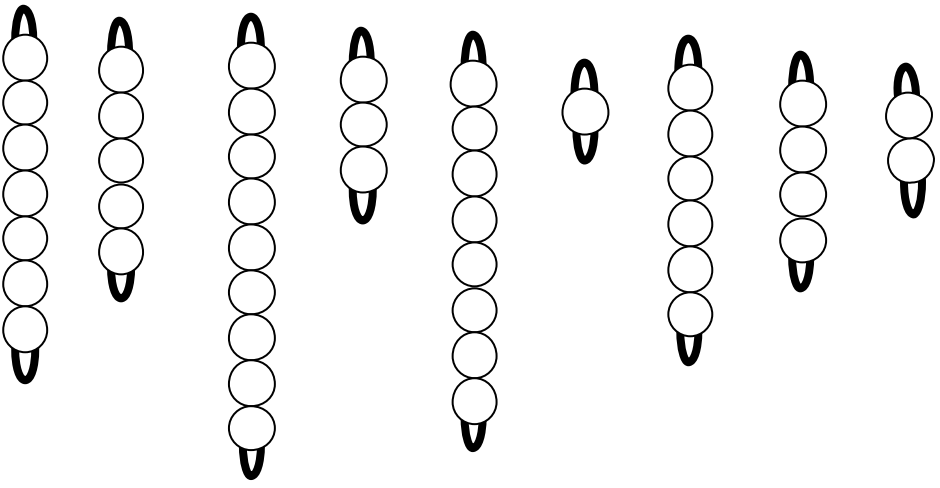
2.  **Ecris** le nombre de perles et  **colorie** colorie .

	<input type="checkbox"/>
	<input type="checkbox"/>
	<input type="checkbox"/>
	<input type="checkbox"/>
	<input type="checkbox"/>
	<input type="checkbox"/>
	<input type="checkbox"/>
	<input type="checkbox"/>
	<input type="checkbox"/>

	<input type="checkbox"/>
	<input type="checkbox"/>
	<input type="checkbox"/>
	<input type="checkbox"/>
	<input type="checkbox"/>
	<input type="checkbox"/>
	<input type="checkbox"/>
	<input type="checkbox"/>
	<input type="checkbox"/>

	<input type="checkbox"/>
	<input type="checkbox"/>
	<input type="checkbox"/>
	<input type="checkbox"/>
	<input type="checkbox"/>
	<input type="checkbox"/>
	<input type="checkbox"/>
	<input type="checkbox"/>
	<input type="checkbox"/>

	<input type="checkbox"/>
	<input type="checkbox"/>
	<input type="checkbox"/>
	<input type="checkbox"/>
	<input type="checkbox"/>
	<input type="checkbox"/>
	<input type="checkbox"/>
	<input type="checkbox"/>
	<input type="checkbox"/>



Prénom :

Date :

Comparer des quantités

Numération

1.  **Entoure** le nombre le plus petit.

1	5
---	---

8	5
---	---

4	6
---	---

3	9
---	---

8	7
---	---

9	6
---	---

4	5
---	---

2.  **Entoure** le nombre le plus grand.

3	5
---	---

9	5
---	---

2	7
---	---

1	4
---	---

8	9
---	---

5	2
---	---

3	4
---	---

3.  **Ecris** l'expression qui convient :

est plus grand que
est plus petit que

5 3

1 4

7 9

4 8

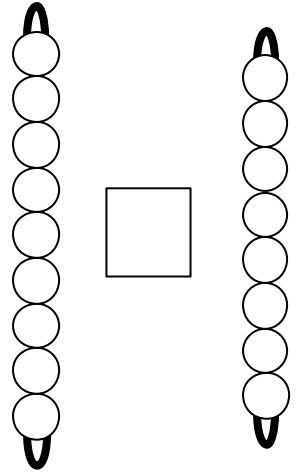
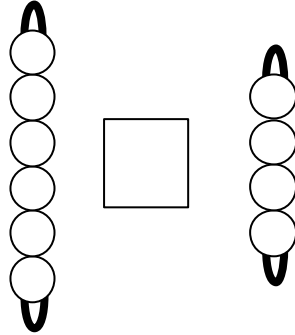
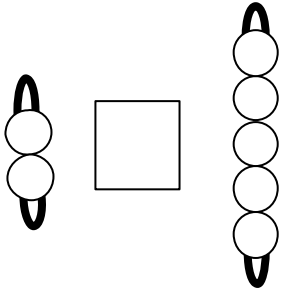
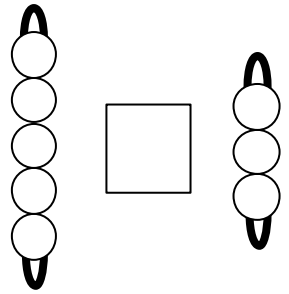
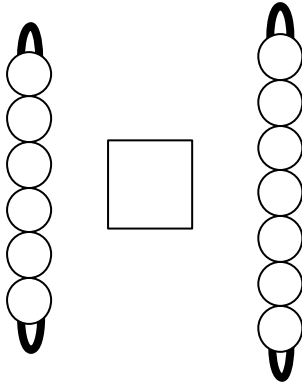
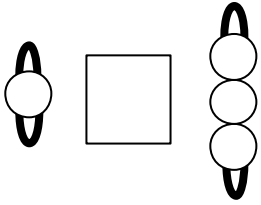
Prénom :

Date :

Les signes < et >

Numération

1.  **Ecris** le signe < ou > dans les cases.



2.  **Ecris** le signe < ou > dans les cases.

4 8

4 2

3 9

1 5

7 8

5 2

3 6

7 2

6 9

Prénom :

Date :

Ranger des nombres

Numération

1.  **Colle** les barrettes de la plus petite à la plus grande.

--

--

2.  **Ecris** les nombres dans l'ordre croissant :

3	5	1	8
---	---	---	---

..... < < <

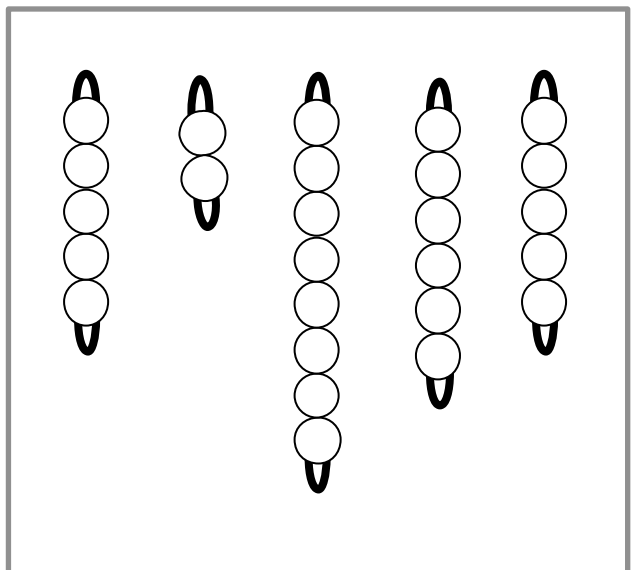
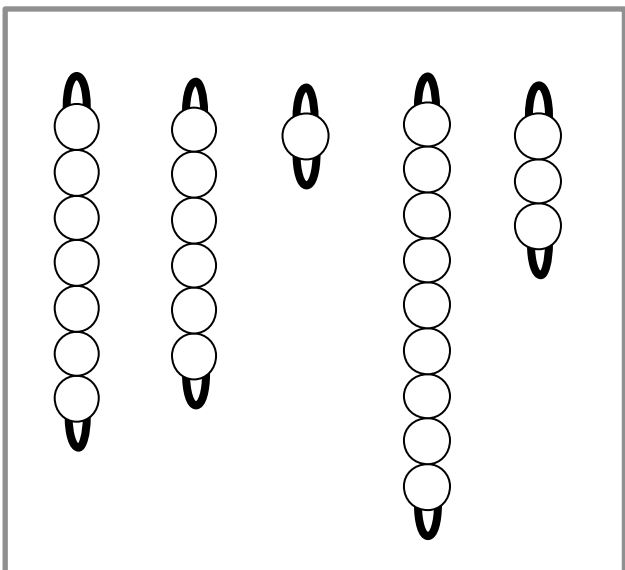
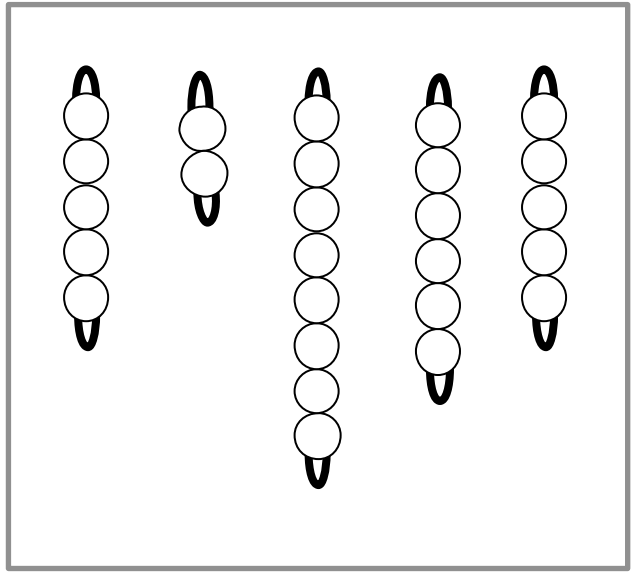
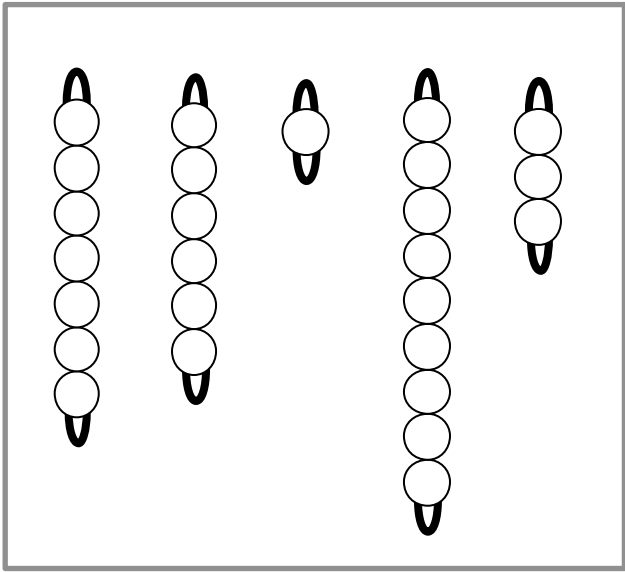
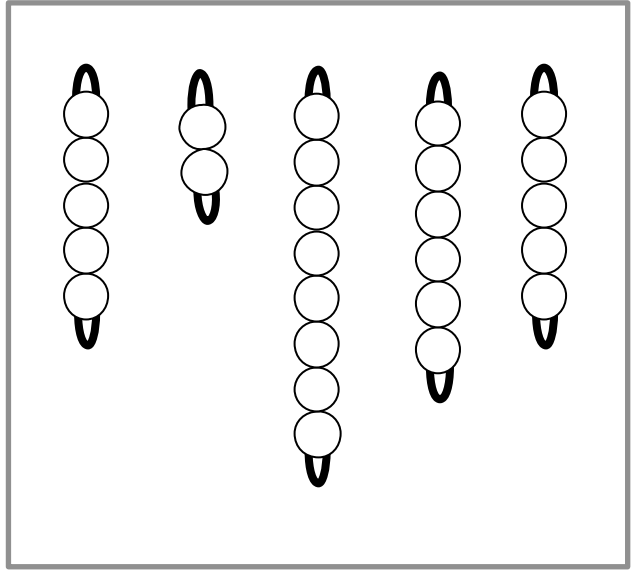
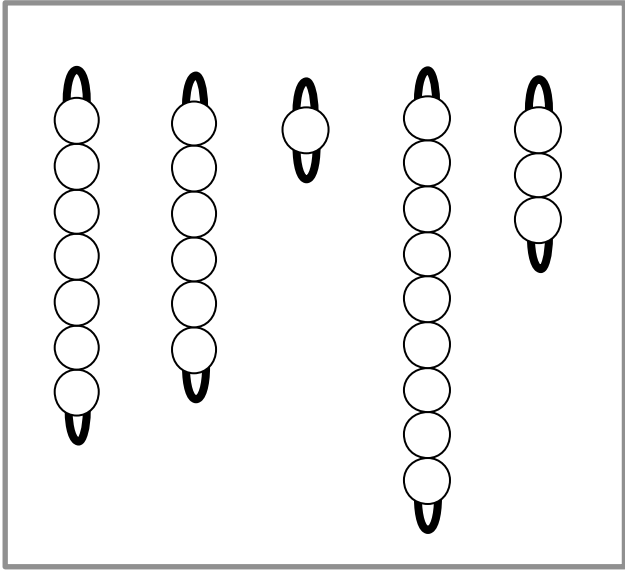
2	7	3	6
---	---	---	---

..... < < <

2.  **Ecris** les nombres dans l'ordre décroissant :

1	9	6	8
---	---	---	---

..... > > >



Prénom :

Date :

Comparer et ranger

Numération

1.  **Ecris** le signe < ou > dans les cases.

2 8

9 2

5 8

1 7

3 4

4 2

5 6

9 1

7 9

2.  **Ecris** les nombres dans l'ordre croissant :

1	9	4	6
---	---	---	---

..... < < <

3	4	8	7
---	---	---	---

..... < < <

2.  **Ecris** les nombres dans l'ordre décroissant :

8	2	7	5
---	---	---	---

..... > > >

Prénom :

Date :

Evaluation

NOMBRES

5

Je sais comparer les nombres jusqu'à 10.

--	--	--	--	--

1.  **Ecris** le signe < ou > dans les cases.

5 8

9 2

6 8

4 1

3 2

7 4

2.  **Ecris** les nombres dans l'ordre croissant :

9	4	7	2
---	---	---	---

..... < < <

6	8	3	4
---	---	---	---

..... < < <

NOMBRES

9

Je sais dire et écrire une suite de nombres dans l'ordre croissant ou décroissant → 10.

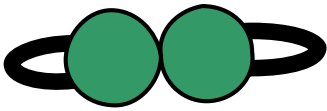
--	--	--	--	--

2.  **Ecris** les nombres dans l'ordre décroissant :

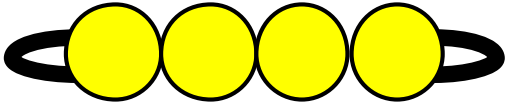
2	8	9	4
---	---	---	---

..... > > >

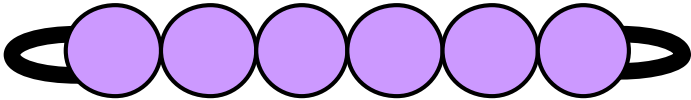
1



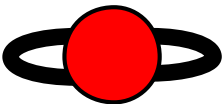
2



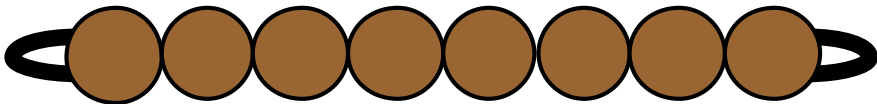
3



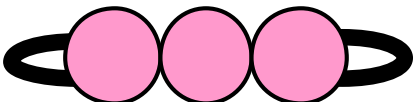
4




5



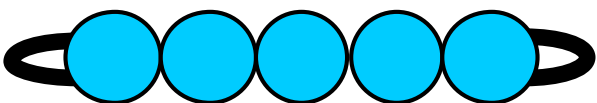
6



7



8



9

