

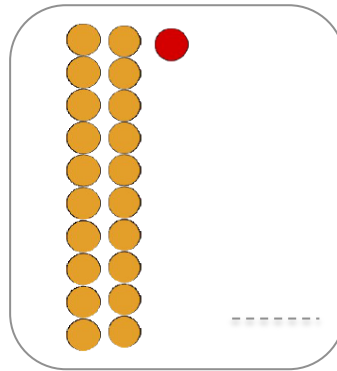
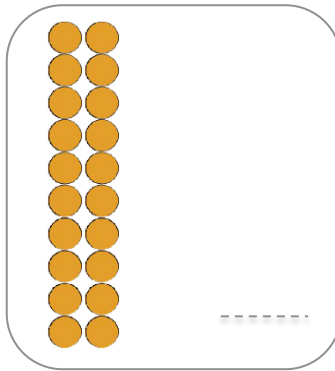
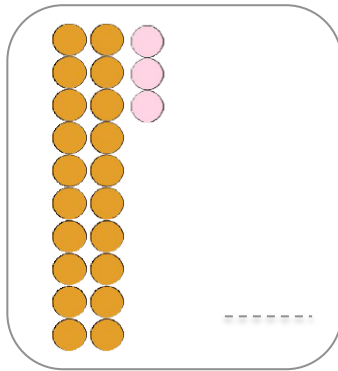
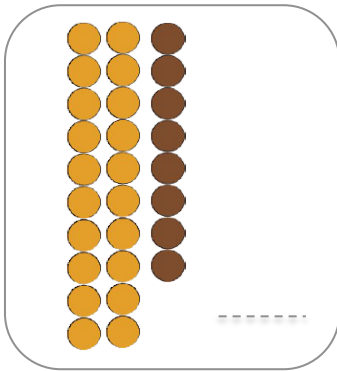
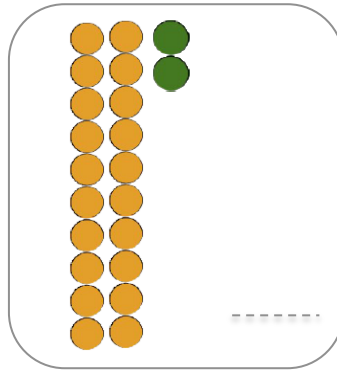
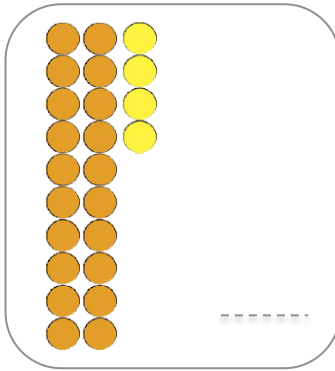
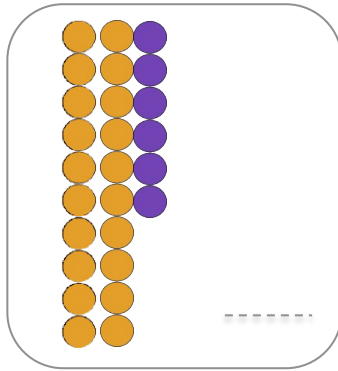
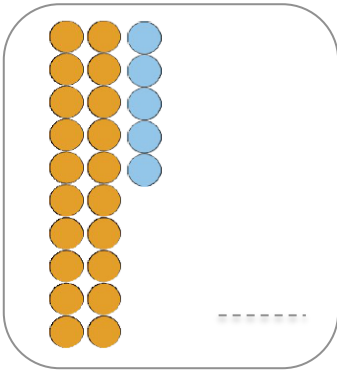
Prénom :

Date :

Les nombres de 20 à 29

Numération

1. **Ecris** le nombre correspondant :



2. **Dessine** le nombre de perles :

25

21

27

28

22

24

26

23

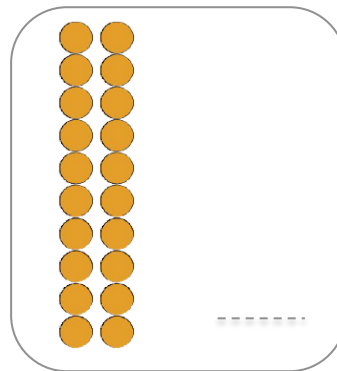
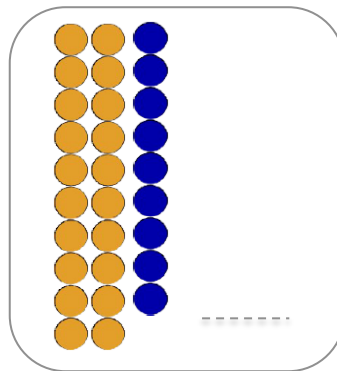
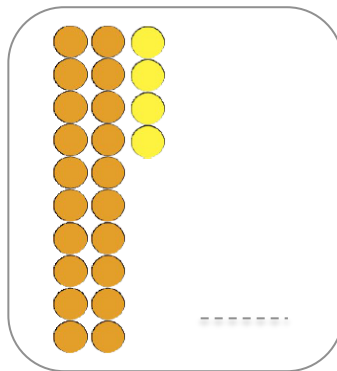
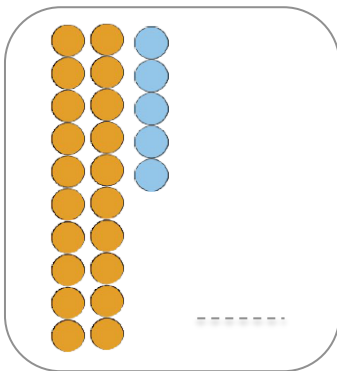
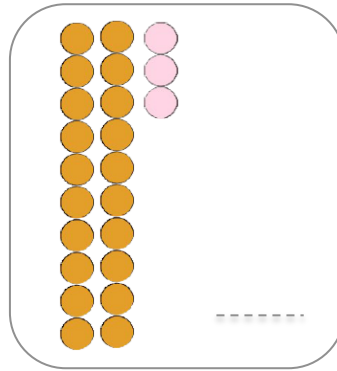
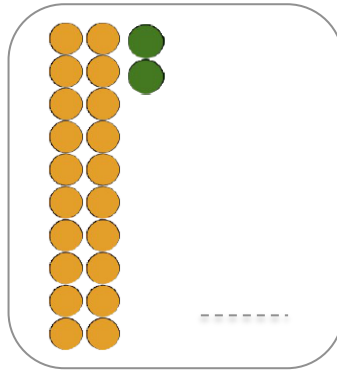
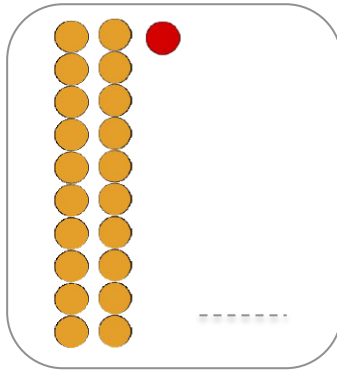
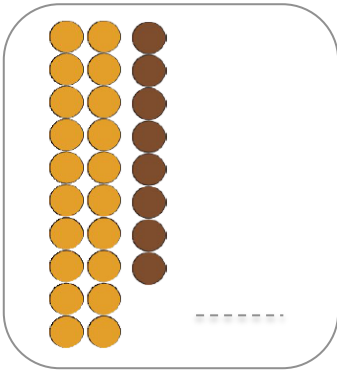
Prénom :

Date :

Les nombres de 20 à 29 (2)

Numération

1.  **Ecris** le nombre correspondant :



2.  **Calcule** :

$20 + 6 = \dots$

$20 + 3 = \dots$

$20 + 5 = \dots$

$20 + 2 = \dots$

$20 + 1 = \dots$

$20 + 0 = \dots$

$20 + 9 = \dots$

$20 + 7 = \dots$

$20 + 6 = \dots$

$40 + 4 = \dots$

$20 + 8 = \dots$

$20 + 5 = \dots$

3.  **Complète** les bandes numériques :

11	12	13	14	15		17	18		20		22		24		26		28
----	----	----	----	----	--	----	----	--	----	--	----	--	----	--	----	--	----

13			16	17	18				22			25			28		
----	--	--	----	----	----	--	--	--	----	--	--	----	--	--	----	--	--

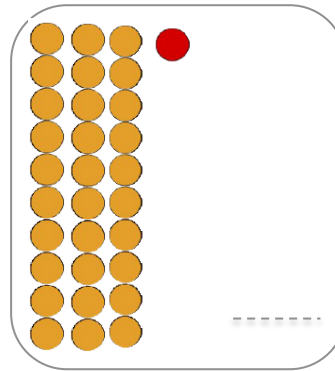
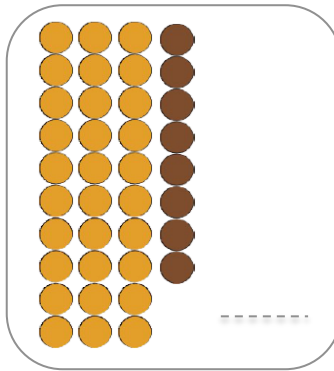
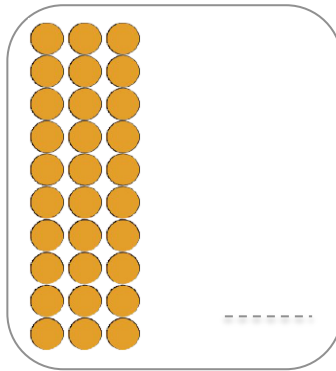
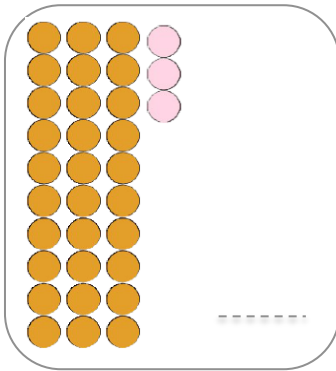
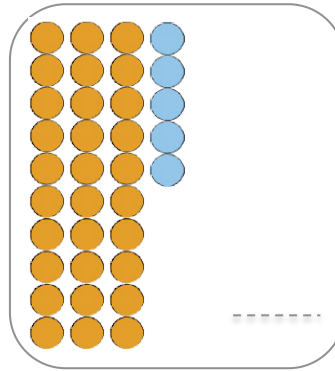
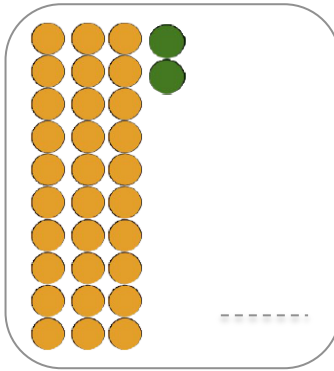
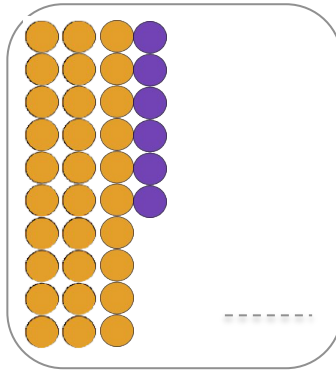
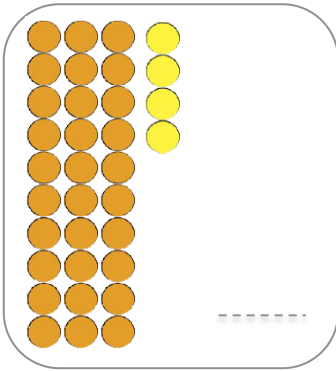
Prénom :

Date :

Les nombres de 30 à 39

Numération

1. **Ecris** le nombre correspondant :



2. **Dessine** le nombre de perles :

38

33

31

35

37

32

30

36

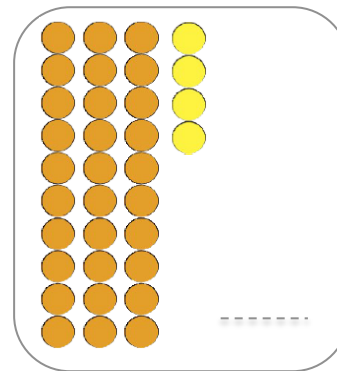
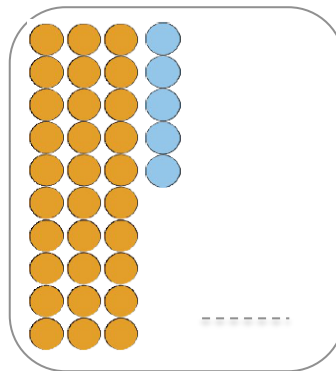
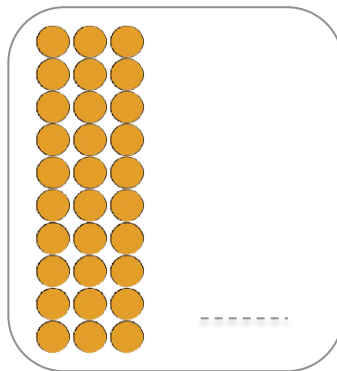
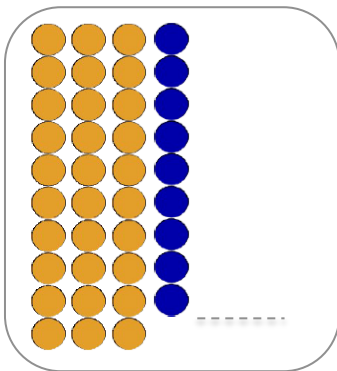
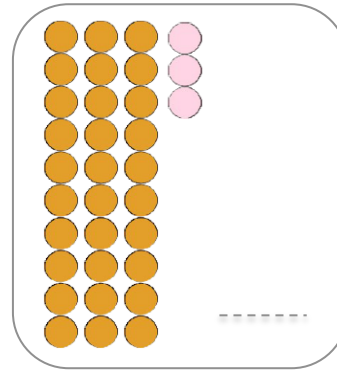
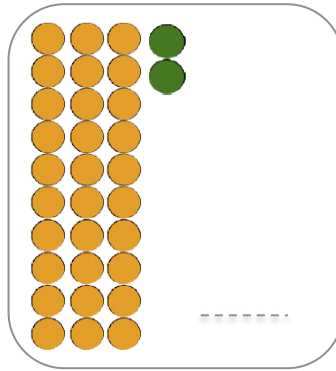
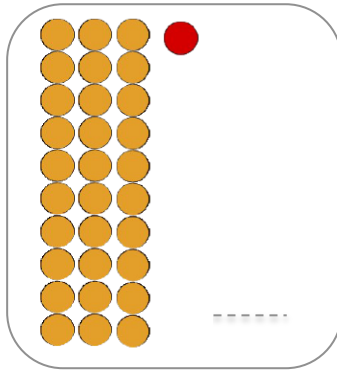
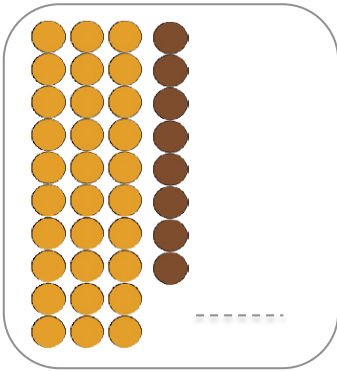
Prénom :

Date :

Les nombres de 30 à 39 (2)

Numération

1.  **Ecris** le nombre correspondant :



2.  **Calcule** :

$30 + 1 = \dots$

$30 + 2 = \dots$

$30 + 5 = \dots$

$30 + 8 = \dots$

$30 + 7 = \dots$

$20 + 7 = \dots$

$30 + 9 = \dots$

$20 + 1 = \dots$

$30 + 6 = \dots$

$30 + 4 = \dots$

$30 + 3 = \dots$

$20 + 4 = \dots$

3.  **Complète** les bandes numériques :

21	22		24	25			28		30		32		34		36		38
----	----	--	----	----	--	--	----	--	----	--	----	--	----	--	----	--	----

18			21		23				27			30			33		
----	--	--	----	--	----	--	--	--	----	--	--	----	--	--	----	--	--

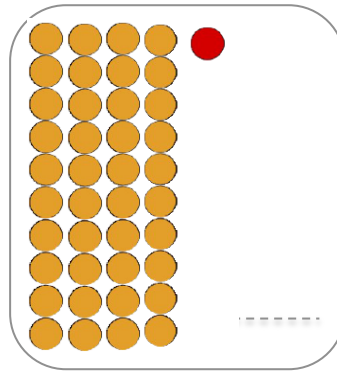
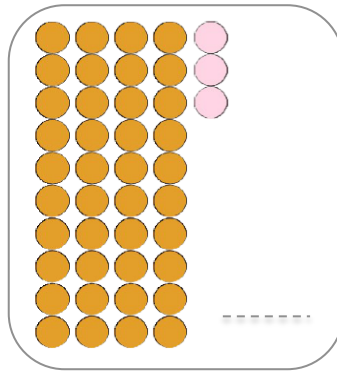
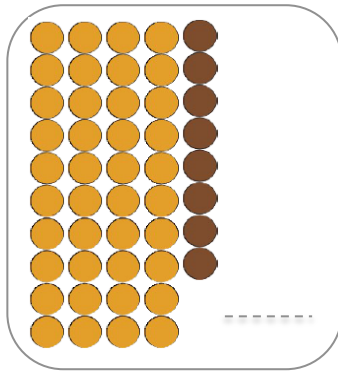
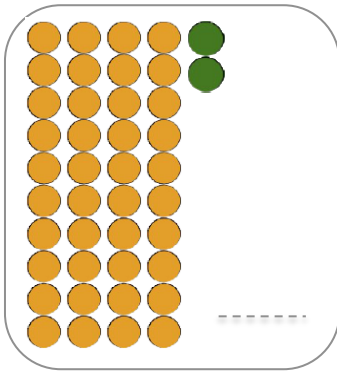
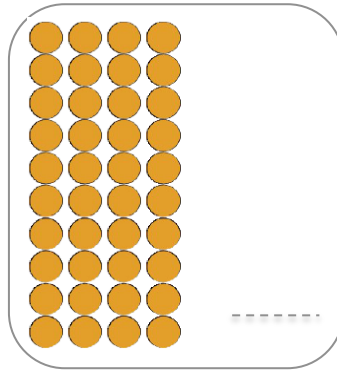
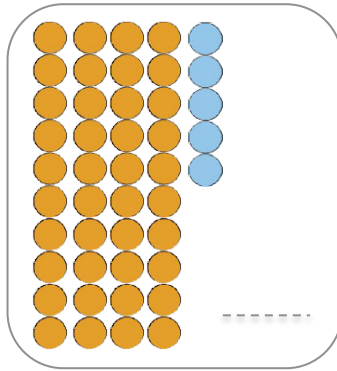
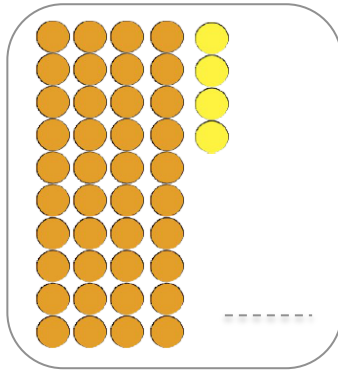
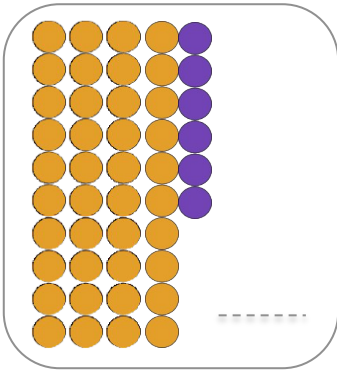
Prénom :

Date :

Les nombres de 40 à 49

Numération

1. **Ecris** le nombre correspondant :



2. **Dessine** le nombre de perles :

41

40

48

44

47

46

45

42

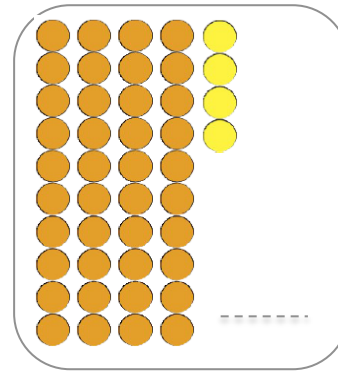
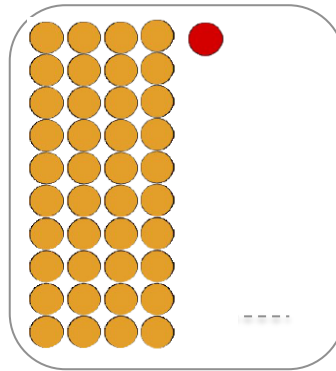
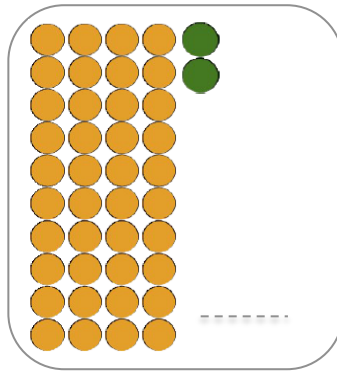
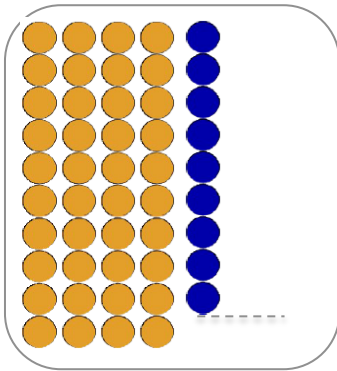
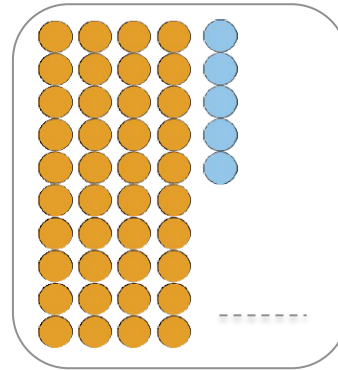
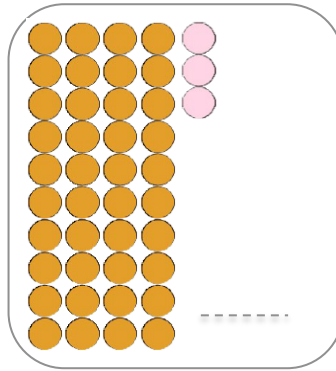
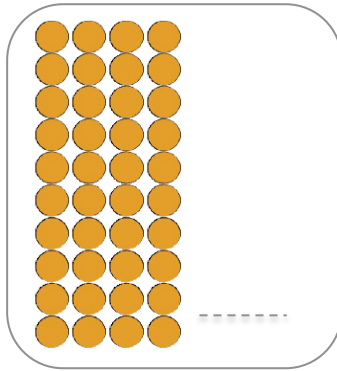
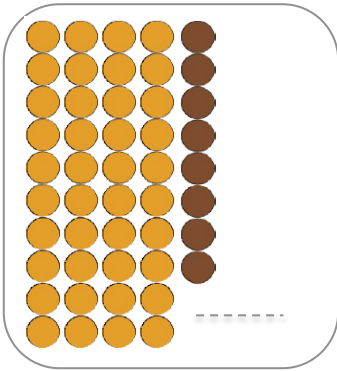
Prénom :

Date :

Les nombres de 40 à 49 (2)

Numération

1.  **Ecris** le nombre correspondant :



2.  **Calcule** :

$40 + 7 = \dots$

$30 + 2 = \dots$

$40 + 0 = \dots$

$40 + 3 = \dots$

$40 + 8 = \dots$

$40 + 4 = \dots$

$40 + 5 = \dots$

$40 + 1 = \dots$

$20 + 6 = \dots$

$30 + 4 = \dots$

$40 + 2 = \dots$

$40 + 6 = \dots$

3.  **Complète** les bandes numériques :

30	31		33				37		39		41		43		45		
----	----	--	----	--	--	--	----	--	----	--	----	--	----	--	----	--	--

33			36		38				42			45			48		
----	--	--	----	--	----	--	--	--	----	--	--	----	--	--	----	--	--

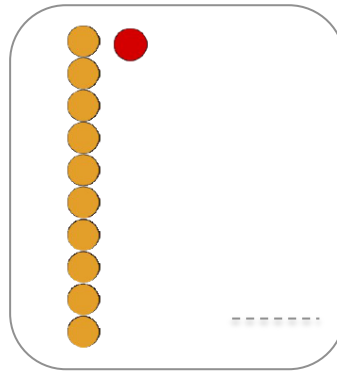
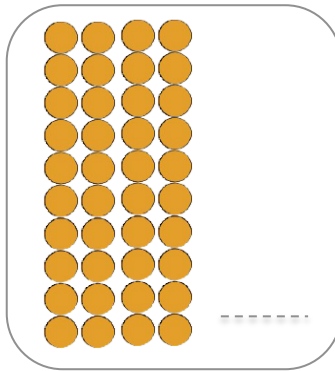
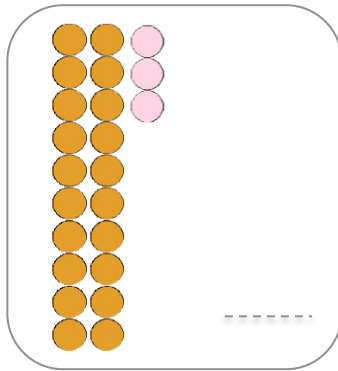
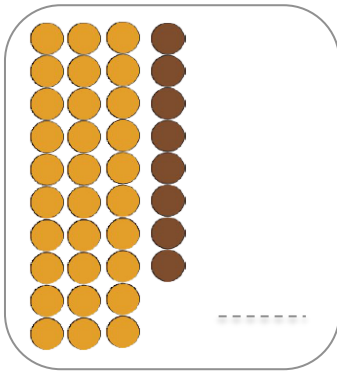
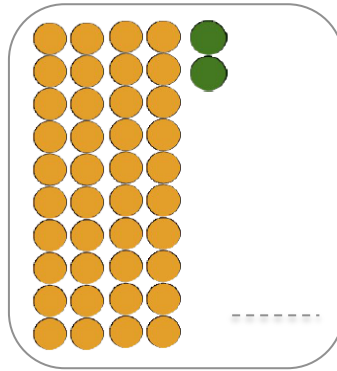
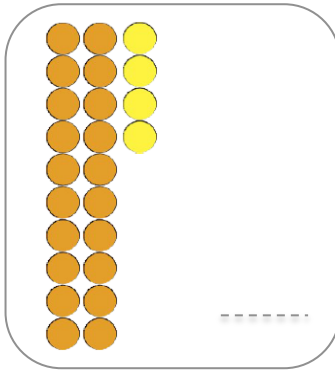
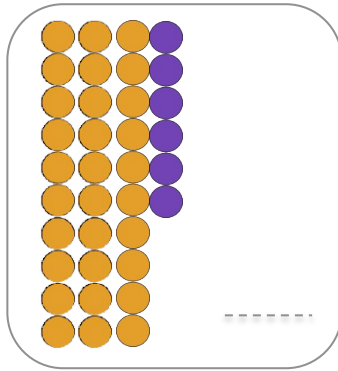
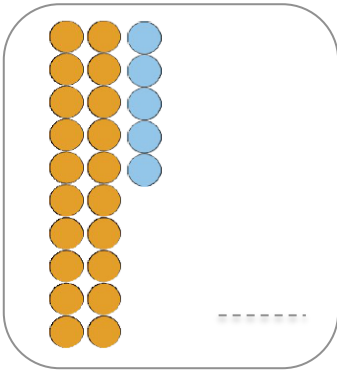
Prénom :

Date :

Les nombres
de 20 à 49

Numération

1. **Ecris** le nombre correspondant :



2. **Dessine** le nombre de perles :

35

21

47

28

22

34

26

43

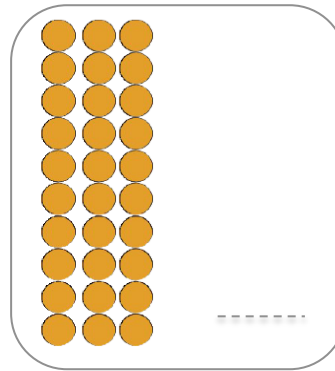
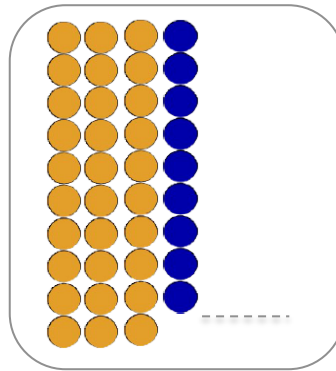
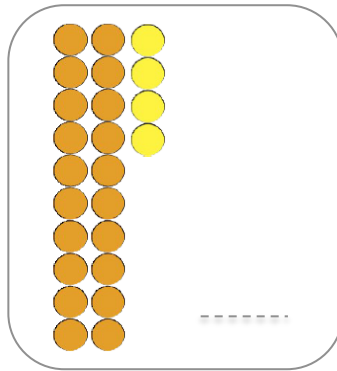
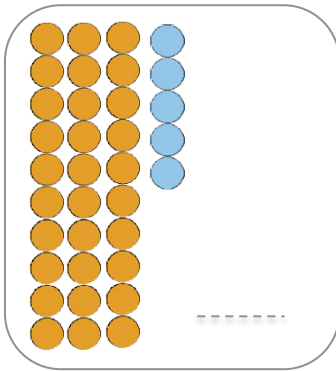
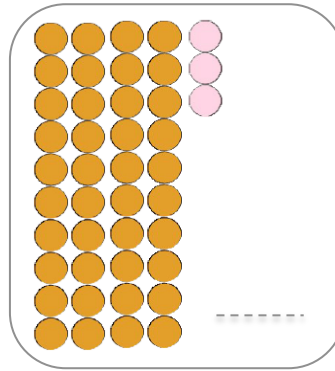
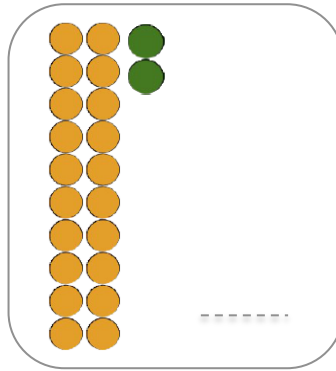
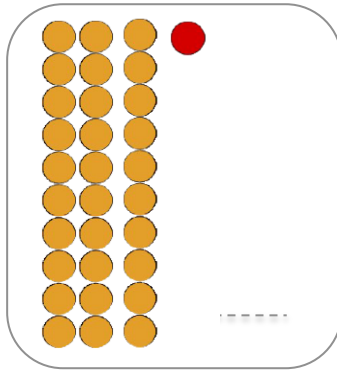
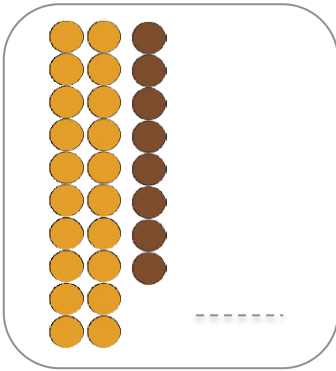
Prénom :

Date :

Les nombres de 20 à 49 (2)

Numération

1.  **Ecris** le nombre correspondant :



2.  **Calcule** :

$20 + 2 = \dots$

$30 + 3 = \dots$

$40 + 0 = \dots$

$40 + 6 = \dots$

$20 + 1 = \dots$

$30 + 5 = \dots$

$30 + 4 = \dots$

$40 + 7 = \dots$

$20 + 6 = \dots$

$40 + 9 = \dots$

$10 + 8 = \dots$

$30 + 5 = \dots$

3.  **Complète** les bandes numériques :

31	32	33	34	35		37	38		40		42		44		46		48
----	----	----	----	----	--	----	----	--	----	--	----	--	----	--	----	--	----

22			25	26	27				31			34			37		
----	--	--	----	----	----	--	--	--	----	--	--	----	--	--	----	--	--