

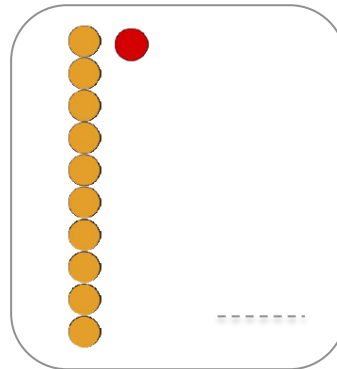
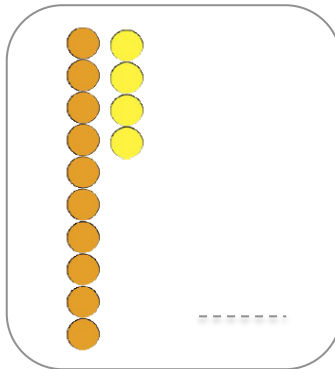
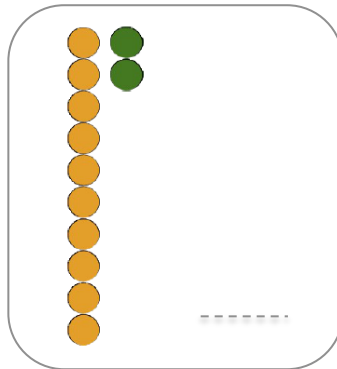
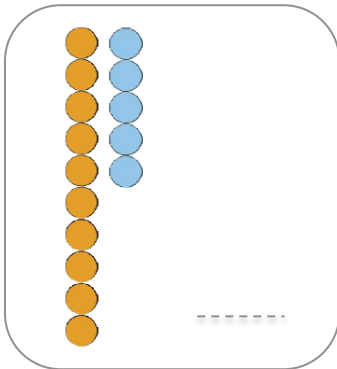
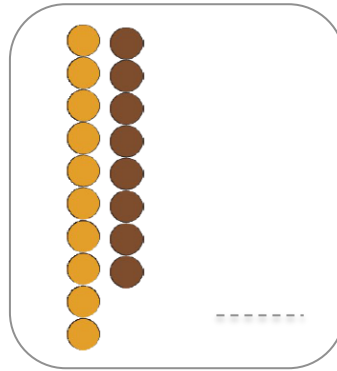
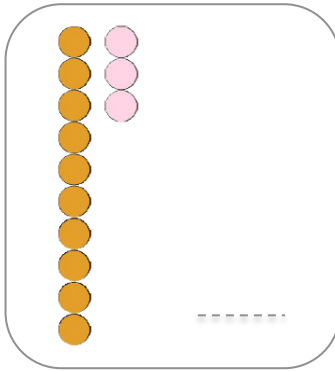
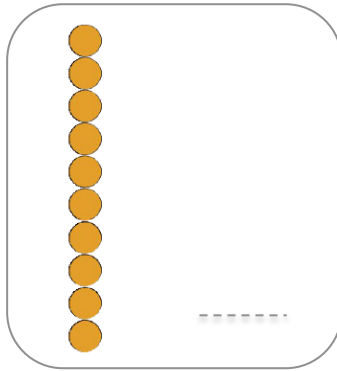
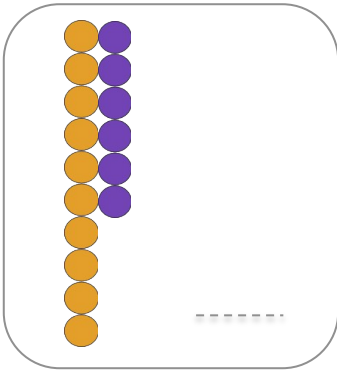
Prénom :

Date :

# Les nombres de 10 à 19

Numération

1. **Ecris** le nombre correspondant :



2. **Dessine** le nombre de perles :

15

11

17

18

12

14

16

13

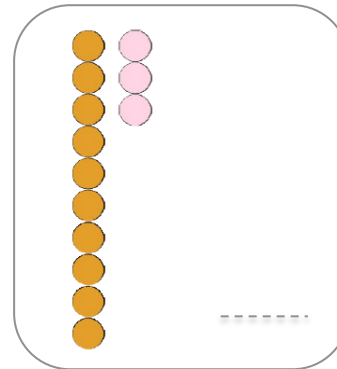
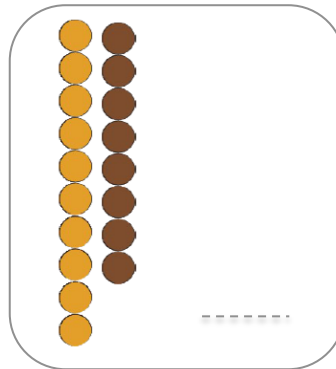
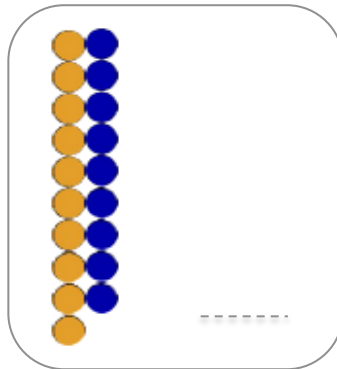
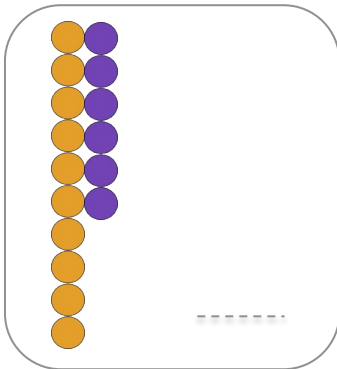
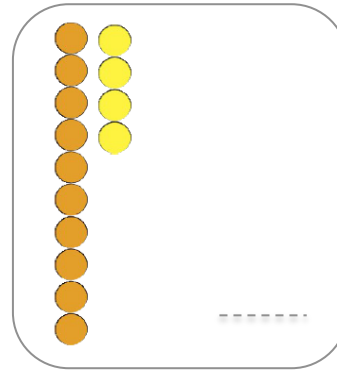
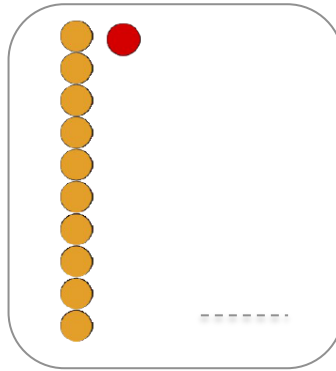
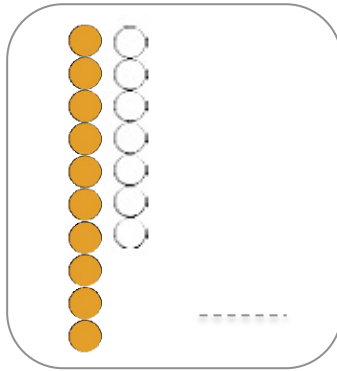
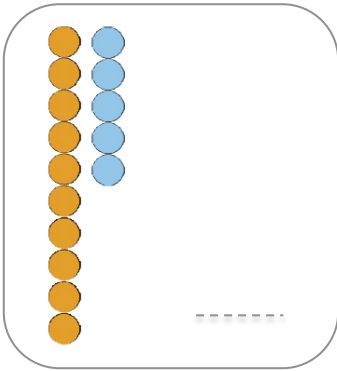
Prénom :

Date :

## Les nombres de 10 à 19 (2)

Numération

1.  **Ecris** le nombre correspondant :



2.  **Calcule** :

$10 + 2 = \dots$

$10 + 3 = \dots$

$10 + 0 = \dots$

$10 + 6 = \dots$

$10 + 1 = \dots$

$10 + 5 = \dots$

$10 + 4 = \dots$

$10 + 7 = \dots$

$10 + 6 = \dots$

$10 + 9 = \dots$

$10 + 8 = \dots$

$10 + 3 = \dots$

3.  **Complète** les bandes numériques :

1	2	3	4	5		7	8		10		12		14		16		18
---	---	---	---	---	--	---	---	--	----	--	----	--	----	--	----	--	----

2			5	6	7				11			14			17		
---	--	--	---	---	---	--	--	--	----	--	--	----	--	--	----	--	--