

Prénom :
Date :

Nombres pairs et impairs

Numération

1. **Colorie** les nombres pairs.

38	39	40	41	42	43	44	45	46	47	48	49	50	51
----	----	----	----	----	----	----	----	----	----	----	----	----	----

71	72	73	74	75	76	77	78	79	80	81	82	83	84
----	----	----	----	----	----	----	----	----	----	----	----	----	----

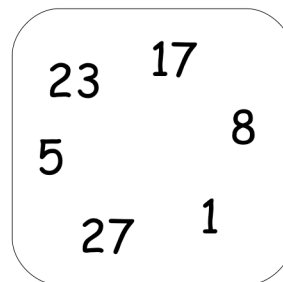
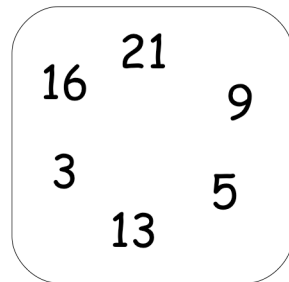
2. **Ecris** un nombre impair dans la case et **dessine** le nombre de billes bleues correspondant.



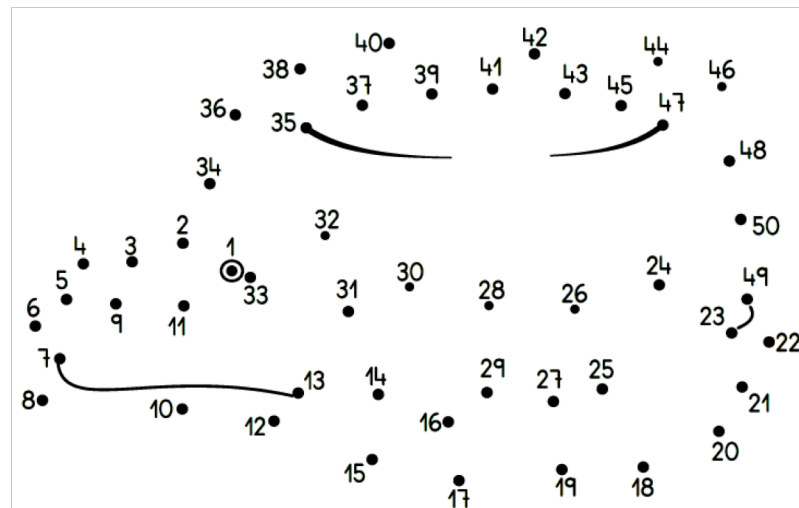
3. **Ecris** un nombre pair dans la case et **dessine** le nombre de billes rouges correspondant.



4. **Entoure** l'intrus dans chaque ensemble.



5. **Relie** seulement les nombres impairs.



Numération

Relie entre eux les nombres pairs



Activity 1: Connect the even numbers to form a witch and a house.

Even numbers: 2, 4, 6, 8, 10, 12, 14, 16, 18, 20, 22, 24, 26, 28, 30, 32, 34, 36, 38, 40, 42, 44, 46, 48, 50.

Odd numbers: 1, 3, 5, 7, 9, 11, 13, 15, 17, 19, 21, 23, 25, 27, 29, 31, 33, 35, 37, 39, 41, 43, 45, 47, 49.

Relie entre eux les nombres pairs

Activity 2: Connect the even numbers to form a cat and a hand.

Even numbers: 2, 4, 6, 8, 10, 12, 14, 16, 18, 20, 22, 24, 26, 28, 30, 32, 34, 36, 38, 40, 42, 44, 46, 48, 50, 52, 54, 56, 58, 60, 62, 64, 66, 68, 70, 72, 74, 76, 78, 80, 82, 84, 86, 88, 90.

Odd numbers: 1, 3, 5, 7, 9, 11, 13, 15, 17, 19, 21, 23, 25, 27, 29, 31, 33, 35, 37, 39, 41, 43, 45, 47, 49, 51, 53, 55, 57, 59, 61, 63, 65, 67, 69, 71, 73, 75, 77, 79, 81, 83, 85, 87, 89, 91.