

Prénom :
Date :

Additions à trous

Calcul

1. **Complète** les additions grâce au jeu de piste.

$1 + 5 = \dots\dots$

$6 + 3 = \dots\dots$

$9 + 3 = \dots\dots\dots$

$15 + 4 = \dots\dots$

$12 + 1 = \dots\dots\dots$

$19 + 5 = \dots\dots\dots$

$24 + 4 = \dots\dots\dots$

$25 + 2 = \dots\dots\dots$

$17 + 6 = \dots\dots\dots$

2. **Dessine** les points sur le dé et **complète** les additions.

$3 + \square = 8$

$8 + \square = 10$

$10 + \square = 16$

$16 + \square = 20$

$20 + \square = 21$

$21 + \square = 25$

3. Complète les additions.


$1 + 1 + 2 + 1 = \dots\dots$

$2 + 1 + 2 + 1 = \dots\dots$

$1 + 1 + 1 + 1 + 2 = \dots\dots$

$1 + 2 + 1 + 2 + 2 = \dots\dots$


4. Dessine les cubes manquants dans les boîtes rouges et **complète** les additions.




$3 + \dots\dots = 8$




$2 + \dots\dots = 5$




$1 + \dots\dots = 5$



$2 + \dots\dots = 7$



$\dots\dots + 3 = 4$



$\dots\dots + 2 = 6$

5. Complète les additions.

$3 + \dots\dots = 6$

$2 + \dots\dots = 3$

$\dots\dots + 3 = 4$

$\dots\dots + 1 = 6$

$\dots\dots + 2 = 4$

$\dots\dots + 1 = 8$

$3 + \dots\dots = 5$

$5 + \dots\dots = 7$